




Adding with Dice

Name: _____


Write the number sentence for each pair of dice.




$$\underline{\quad} + \underline{\quad} = \underline{\quad}$$




$$\underline{\quad} + \underline{\quad} = \underline{\quad}$$




$$\underline{\quad} + \underline{\quad} = \underline{\quad}$$




$$\underline{\quad} + \underline{\quad} = \underline{\quad}$$




$$\underline{\quad} + \underline{\quad} = \underline{\quad}$$




$$\underline{\quad} + \underline{\quad} = \underline{\quad}$$




$$\underline{\quad} + \underline{\quad} = \underline{\quad}$$




$$\underline{\quad} + \underline{\quad} = \underline{\quad}$$




$$\underline{\quad} + \underline{\quad} = \underline{\quad}$$




$$\underline{\quad} + \underline{\quad} = \underline{\quad}$$




$$\underline{\quad} + \underline{\quad} = \underline{\quad}$$




$$\underline{\quad} + \underline{\quad} = \underline{\quad}$$



$$\underline{\quad} + \underline{\quad} = \underline{\quad}$$



$$\underline{\quad} + \underline{\quad} = \underline{\quad}$$




$$\underline{\quad} + \underline{\quad} = \underline{\quad}$$


Adding with Dice

Name: _____


Write the number sentence for each pair of dice.




$$\underline{4 + 2 = 6}$$




$$\underline{5 + 2 = 7}$$




$$\underline{6 + 6 = 12}$$




$$\underline{2 + 1 = 3}$$




$$\underline{5 + 6 = 11}$$




$$\underline{3 + 3 = 6}$$




$$\underline{1 + 4 = 5}$$




$$\underline{4 + 1 = 5}$$




$$\underline{5 + 5 = 10}$$




$$\underline{2 + 4 = 6}$$




$$\underline{6 + 2 = 8}$$




$$\underline{3 + 6 = 9}$$



$$\underline{6 + 4 = 10}$$



$$\underline{1 + 5 = 6}$$



$$\underline{4 + 3 = 7}$$