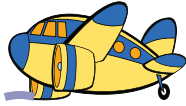


Name: _____

Number Line Airplane


Complete the number sentence for each airplane's trip.

Example:




0 1 2 3 4 5 6 7 8 9

$$\underline{7} - \underline{\quad} = \underline{5}$$



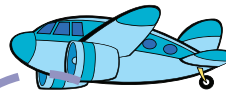
0 1 2 3 4 5 6 7 8 9

$$\underline{9} - \underline{\quad} = \underline{4}$$



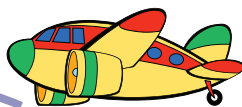
0 1 2 3 4 5 6 7 8 9

$$\underline{7} - \underline{\quad} = \underline{6}$$



0 1 2 3 4 5 6 7 8 9 10 11

$$\underline{11} - \underline{\quad} = \underline{8}$$



0 1 2 3 4 5 6 7 8 9

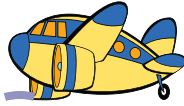
$$\underline{6} - \underline{\quad} = \underline{1}$$

Name: _____

Number Line Airplane


Complete the number sentence for each airplane's trip.

Example:




0 1 2 3 4 5 6 7 8 9

$$\underline{7} - \underline{2} = \underline{5}$$



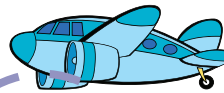
0 1 2 3 4 5 6 7 8 9

$$\underline{9} - \underline{5} = \underline{4}$$




0 1 2 3 4 5 6 7 8 9

$$\underline{7} - \underline{1} = \underline{6}$$



0 1 2 3 4 5 6 7 8 9 10 11

$$\underline{11} - \underline{3} = \underline{8}$$



0 1 2 3 4 5 6 7 8 9

$$\underline{6} - \underline{5} = \underline{1}$$