

Name: _____

Angles: Obtuse, Acute or Right?

Look at each of the following angles. Decide if it is an obtuse, acute, or right angle. Write your answer in the blank below the angle.



OBTUSE
more than 90°



ACUTE
less than 90°



RIGHT
 90°



















Name: _____

Angles: Obtuse, Acute or Right?

Look at each of the following angles. Decide if they are an obtuse, acute, or right angle. Write your answer in the blank below the angle.

OBTUSE
more than 90°



ACUTE
less than 90°



RIGHT
 90°



Acute



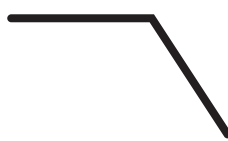
Right



Acute



Right



Obtuse



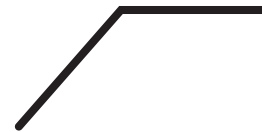
Obtuse



Acute



Right



Obtuse