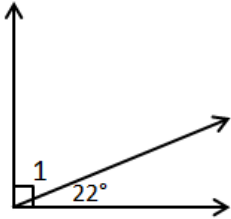


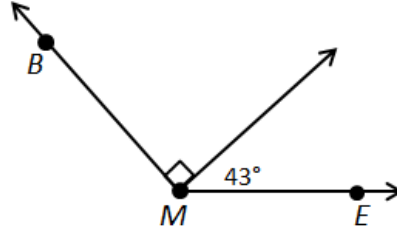
Missing Measures

Find the angle measure.

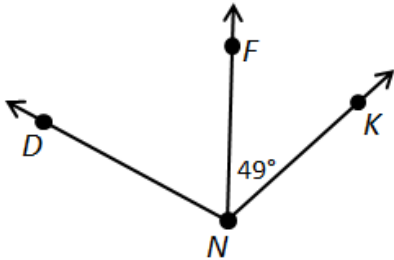
1. $m\angle 1 =$ _____



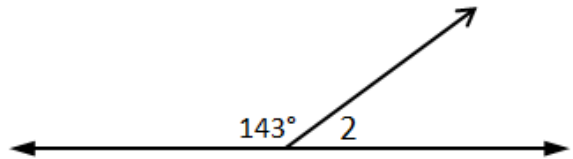
2. $m\angle BME =$ _____



3. $m\angle DNK = 110^\circ$
 $m\angle DNF =$ _____



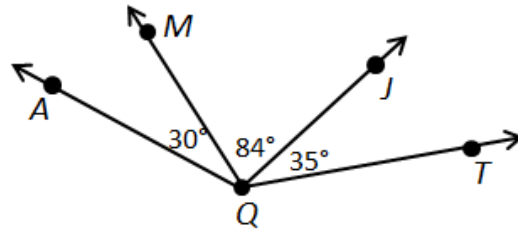
4. $m\angle 2 =$ _____



5. $m\angle AQJ =$ _____

6. $m\angle MQT =$ _____

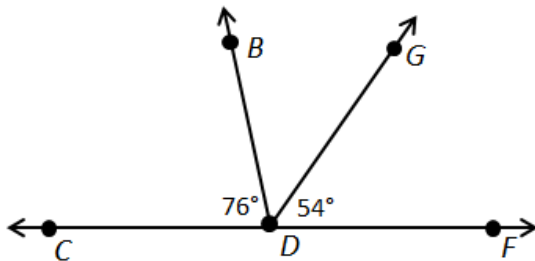
7. $m\angle AQT =$ _____



8. $m\angle BDG =$ _____

9. $m\angle CDG =$ _____

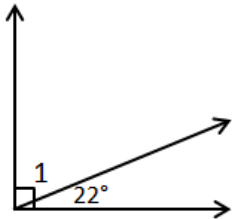
10. $m\angle BDF =$ _____



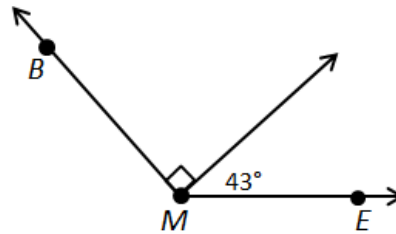
Missing Measures

Find the angle measure.

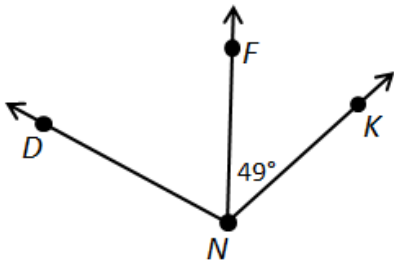
1. $m\angle 1 = \underline{68^\circ}$



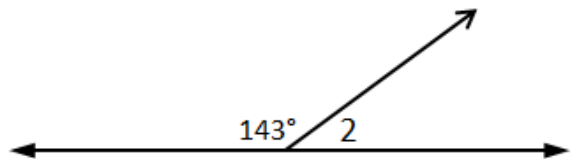
2. $m\angle BME = \underline{133^\circ}$



3. $m\angle DNK = 110^\circ$
 $m\angle DNF = \underline{61^\circ}$



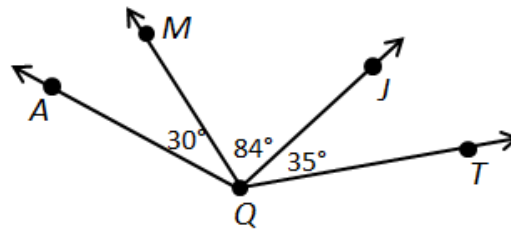
4. $m\angle 2 = \underline{37^\circ}$



5. $m\angle AQJ = \underline{114^\circ}$

6. $m\angle MQT = \underline{119^\circ}$

7. $m\angle AQT = \underline{149^\circ}$



8. $m\angle BDG = \underline{50^\circ}$

9. $m\angle CDG = \underline{126^\circ}$

10. $m\angle BDF = \underline{104^\circ}$

