

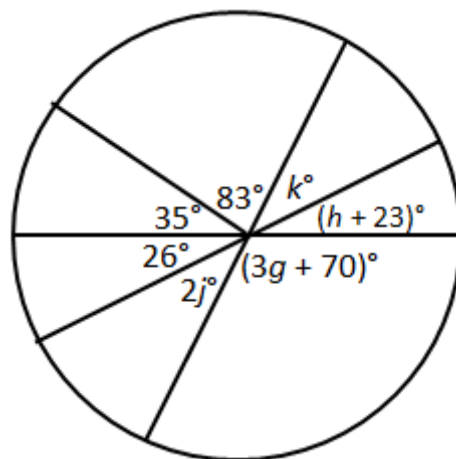
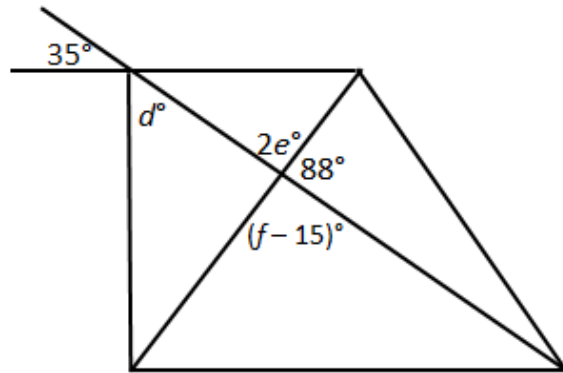
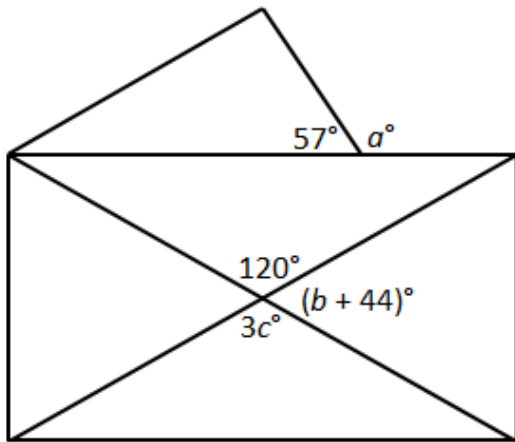
Using Angle Relationships

Find the values of the variables.

$a =$ _____ $b =$ _____ $c =$ _____

$d =$ _____ $e =$ _____ $f =$ _____

$g =$ _____ $h =$ _____ $j =$ _____ $k =$ _____



Using Angle Relationships

Find the values of the variables.

$a = \underline{123}$ $b = \underline{16}$ $c = \underline{40}$

$d = \underline{55}$ $e = \underline{46}$ $f = \underline{107}$

$g = \underline{16}$ $h = \underline{3}$ $j = \underline{18}$ $k = \underline{36}$

