


Name: \_\_\_\_\_

## Count the Angles: Triangle or Quadrilateral?

Count the number of angles in each shape below. Write the number in the blank. Then write the name of the shape in the blank.


A.



number of angles \_\_\_\_\_

name of shape \_\_\_\_\_


B.



number of angles \_\_\_\_\_

name of shape \_\_\_\_\_

C.



number of angles \_\_\_\_\_

name of shape \_\_\_\_\_

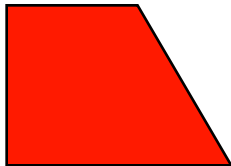
D.



number of angles \_\_\_\_\_

name of shape \_\_\_\_\_


E.



number of angles \_\_\_\_\_

name of shape \_\_\_\_\_

F.




number of angles \_\_\_\_\_

name of shape \_\_\_\_\_

Key


Name: \_\_\_\_\_



# Count the Angles: Triangle or Quadrilateral?

Count the number of angles in each shape below. Write the number in the blank. Then write the name of the shape in the blank.


A.



number of angles 3

name of shape triangle


B.



number of angles 4

name of shape quadrilateral


C.



number of angles 3

name of shape triangle

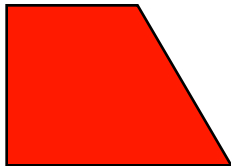
D.



number of angles 4

name of shape quadrilateral


E.



number of angles 4

name of shape quadrilateral

F.



number of angles 3

name of shape triangle