



Name: _____


Hexagons and Pentagons

Pentagons have five angles. Hexagons have six angles. Count the number of angles in each shape below. Write the number of angles in the blank, and whether it is a pentagon or a hexagon.


A.




B.



C.



D.



E.



F.





Name: _____

Key

Hexagons and Pentagons

Pentagons have five angles. Hexagons have six angles. Count the number of angles in each shape below. Write the number of angles in the blank, and whether it is a pentagon or a hexagon.


A.



5

pentagon


B.



6

hexagon


C.



5

pentagon

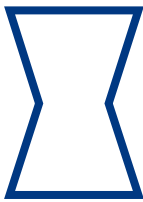
D.



6

hexagon

E.



6

hexagon

F.



5

pentagon
