

Name: \_\_\_\_\_

# Working With Reflex Angles

Part 1: Draw the following reflex angles.

A)  $230^\circ$

B)  $190^\circ$

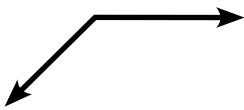
C)  $270^\circ$

D)  $340^\circ$

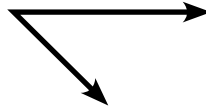
E)  $300^\circ$

Part 2: Identify the reflex angles below by drawing an arc.

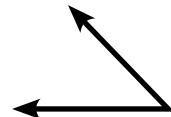
Example



A)



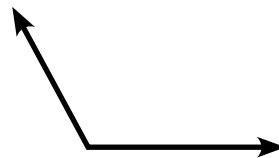
B)



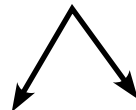
C)



D)



E)



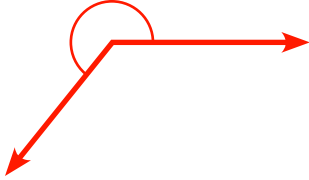
Name: \_\_\_\_\_

Key

# Working With Reflex Angles

Part 1: Draw the following reflex angles.

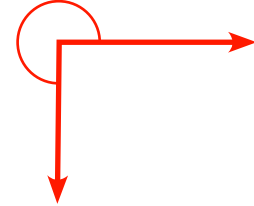
A)  $230^\circ$




B)  $190^\circ$



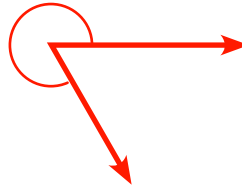
C)  $270^\circ$



D)  $340^\circ$

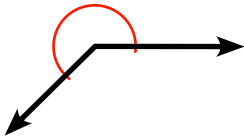


E)  $300^\circ$

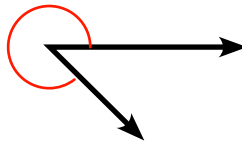


Part 2: Identify the reflex angles below by drawing an arc.

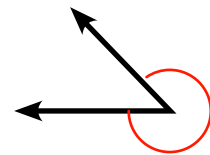
Example



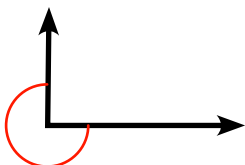
A)



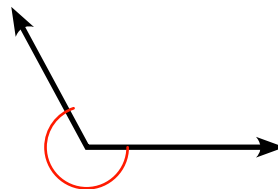
B)



C)



D)



E)

