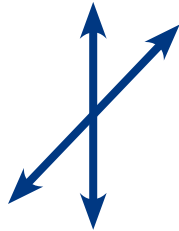


Name: \_\_\_\_\_

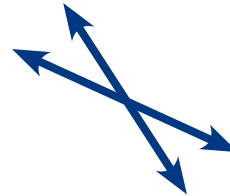
# Working With Vertical Angles

Identify the vertical angles in each figure below by drawing an arc for each angle.

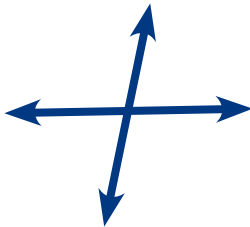
A)



F)




B)




G)




C)



H)




D)



I)



E)



J)



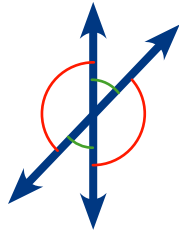
Name: \_\_\_\_\_

Key

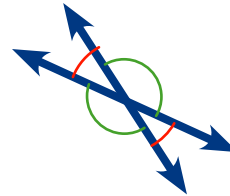
# Working With Vertical Angles

Identify the vertical angles in each figure below by drawing an arc for each angle.

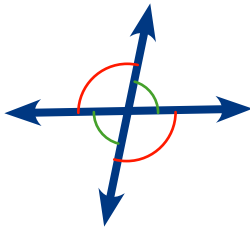
A)



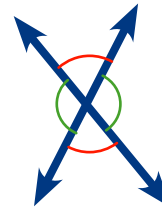
F)



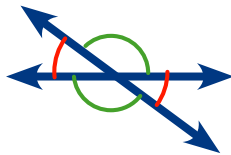
B)



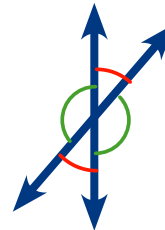
G)



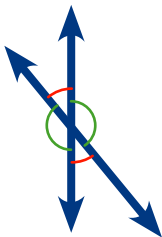
C)



H)



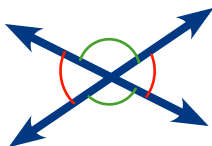
D)



I)



E)



J)

