


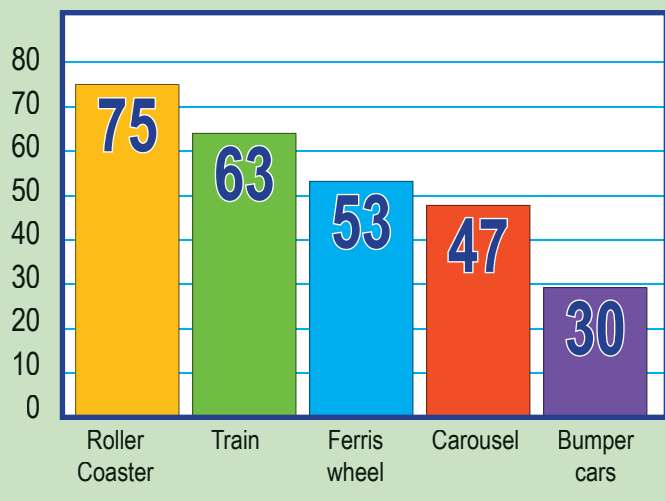
Name: _____

Happyland Amusement Park: Popular Rides

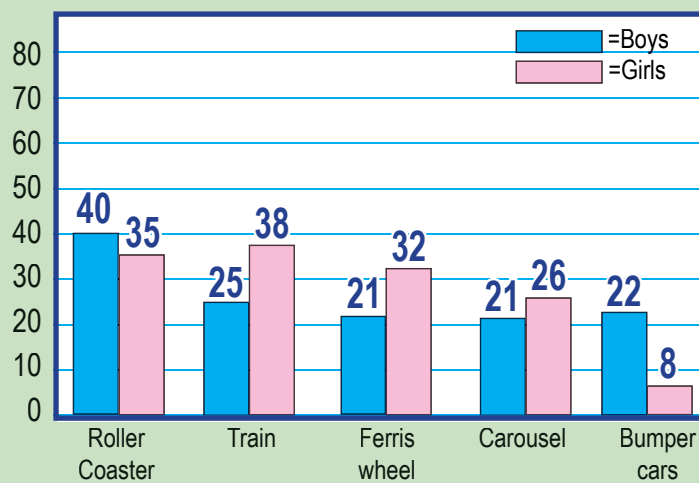
Below is a bar graph of the most popular rides at the Happyland Amusement Park.
Study the graph and answer the questions.




Number of people who rode on Wednesday




Number of boys and girls on each ride on Wednesday




Questions: Answer the following questions.
Be sure to show your work.



1. What was the most popular ride on Wednesday? _____
2. How many more people rode the most popular ride than the least popular ride? _____
3. How many people rode the Ferris wheel and the carousel? _____
4. How many more girls than boys rode the train? _____
5. How many more boys than girls rode the roller coaster? _____





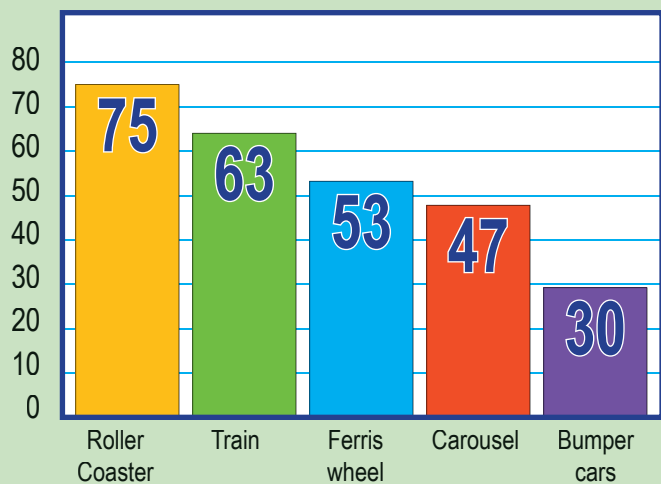
Name: _____

Happyland Amusement Park: Popular Rides

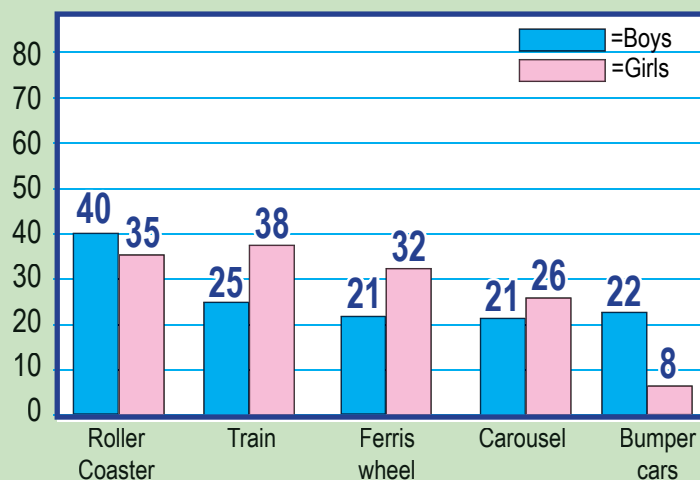
Below is a bar graph of the most popular rides at the Happyland Amusement Park.
Study the graph and answer the questions.




Number of people who rode on Wednesday



Number of boys and girls on each ride on Wednesday



Questions: Answer the following questions.
Be sure to show your work.



1. What was the most popular ride on Wednesday? Roller Coaster
2. How many more people rode the most popular ride than the least popular ride? 45
3. How many people rode the Ferris wheel and the carousel? 100
4. How many more girls than boys rode the train? 23
5. How many more boys than girls rode the roller coaster? 5

