

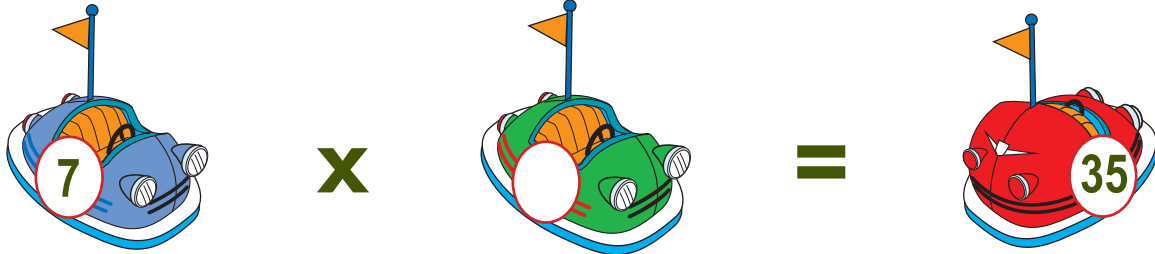
Name: _____

Fill in the Bumper Car Number: Multiplication -

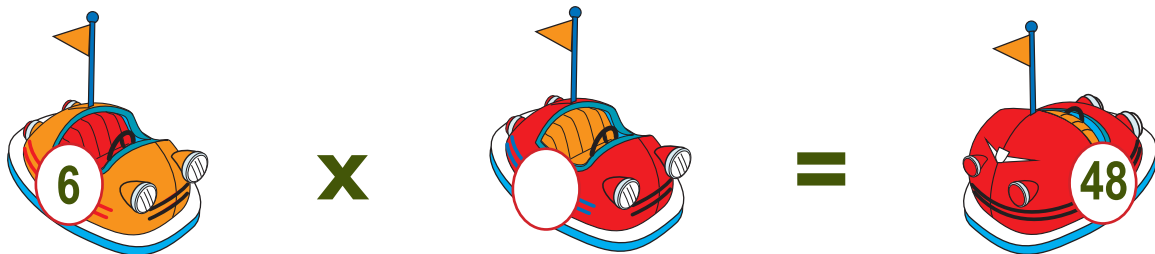
Some of the bumper cars at the amusement park are missing their numbers. Fill in the correct number to complete each number sentence. Write the number on the bumper car.

Example:

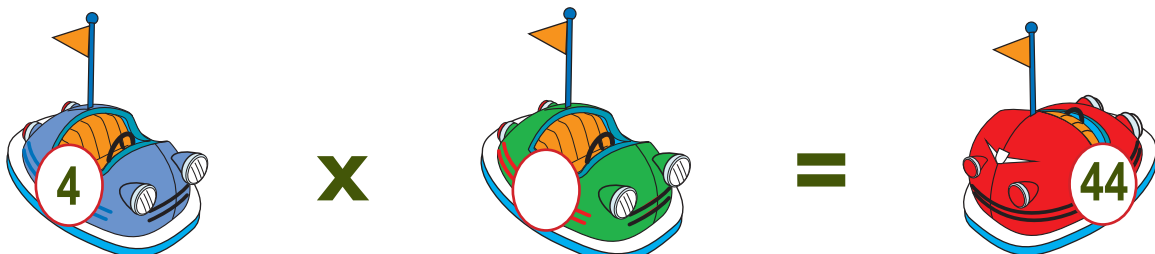

$$4 \times 6 = 24$$


$$7 \times \square = 35$$


$$\square \times 3 = 27$$


$$6 \times \square = 48$$


$$\square \times 10 = 70$$


$$4 \times \square = 44$$


Name: _____

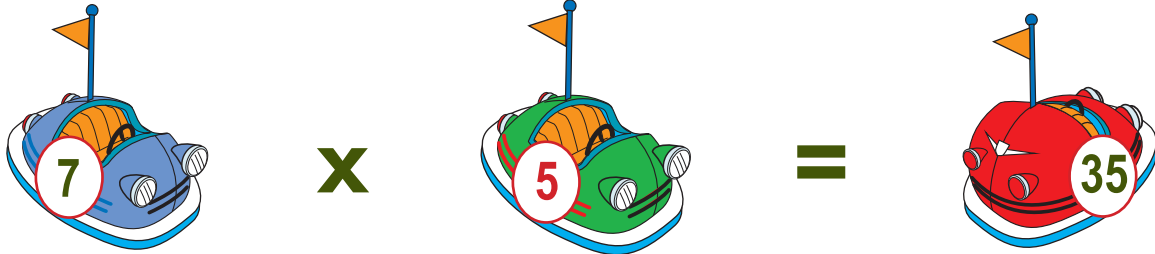
Key

Fill in the Bumper Car Number: Multiplication -

Some of the bumper cars at the amusement park are missing their numbers. Fill in the correct number to complete each number sentence. Write the number on the bumper car.

Example:


$$4 \times 6 = 24$$


$$7 \times 5 = 35$$


$$9 \times 3 = 27$$


$$6 \times 8 = 48$$


$$7 \times 10 = 70$$


$$4 \times 11 = 44$$