

# Number Line Addition and Subtraction

Name: \_\_\_\_\_

EXAMPLE

$3 + 2 = 5$

Part 1. Write the number sentence for each of the following number lines.

A. \_\_\_\_\_

B. \_\_\_\_\_

C. \_\_\_\_\_

D. \_\_\_\_\_

E. \_\_\_\_\_

Part II. Draw the number line for each of the following number sentences.

A.  $5 - 1 = 4$

B.  $4 + 5 = 9$

C.  $10 - 3 = 7$

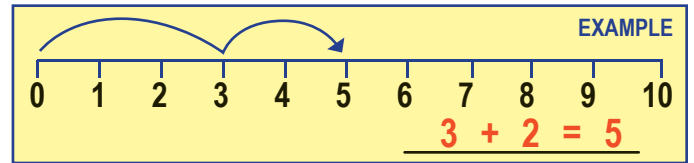
D.  $8 - 5 = 3$

E.  $6 + 4 = 10$

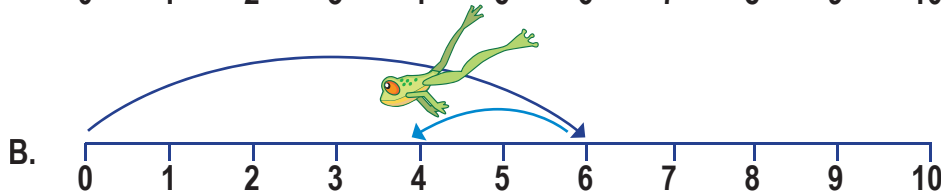
# Number Line Addition and Subtraction

Name: \_\_\_\_\_

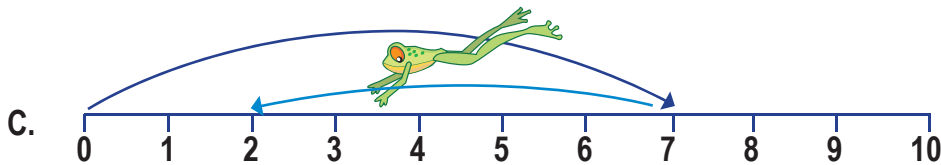
**Part I.** Write the number sentence for each of the following number lines.



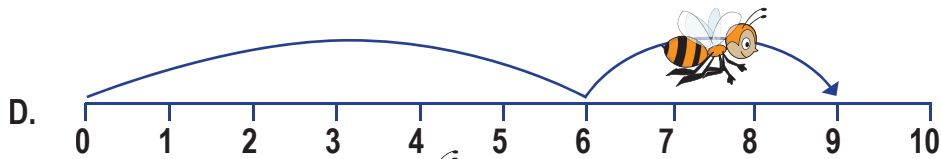
$2 + 8 = 10$




$6 - 2 = 4$



$7 - 5 = 2$



$6 + 3 = 9$



$1 + 5 = 6$

**Part II.** Draw the number line for each of the following number sentences.

