
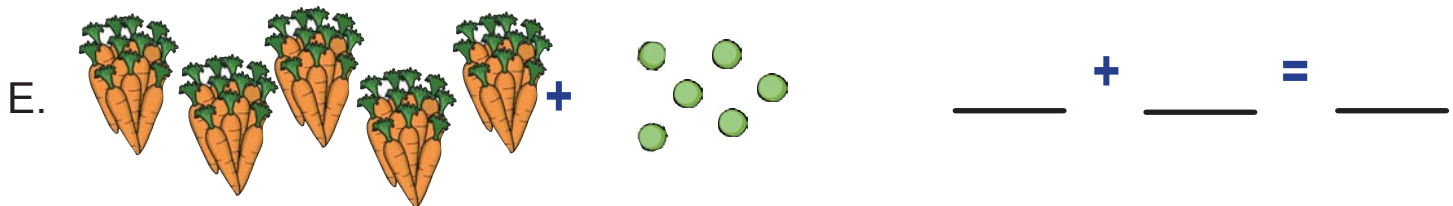
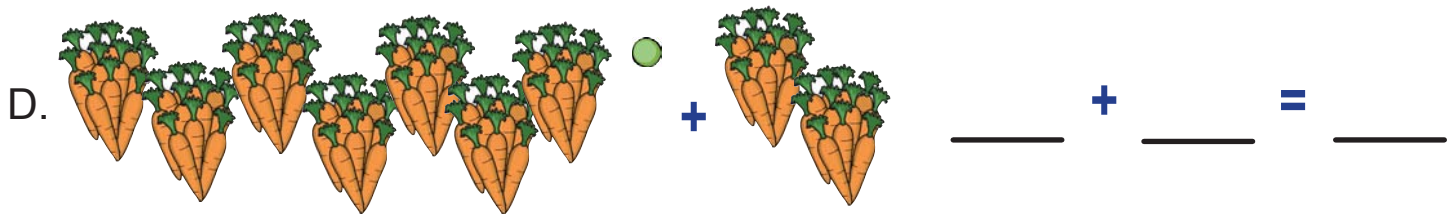
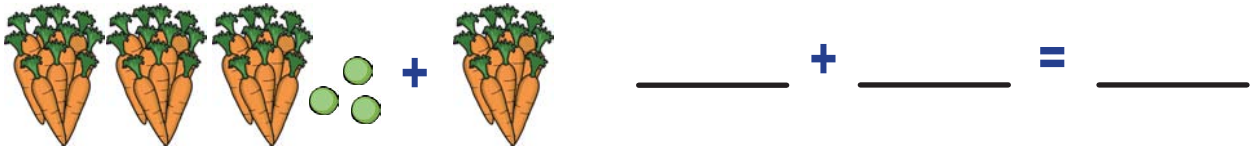


Name: \_\_\_\_\_

## Peas and Carrots: Adding With Place Values

In the problems below the carrots are in bundles of 10. They represent 10's. The peas represent 1's. Write a number sentence for each problem.

Example:



Name: \_\_\_\_\_

## Peas and Carrots: Adding With Place Values

In the problems below the carrots are in bundles of 10. They represent 10's. The peas represent 1's. Write a number sentence for each problem.

Example:




3 bundles of 10 carrots and 3 peas

$$\underline{33} + \underline{10} = \underline{43}$$

A.  2 bundles of 10 carrots and 6 peas


$$\underline{20} + \underline{6} = \underline{26}$$

B.  4 bundles of 10 carrots and 2 peas


$$\underline{42} + \underline{20} = \underline{62}$$

C.  3 bundles of 10 carrots and 4 peas

$$\underline{30} + \underline{4} = \underline{34}$$

D.  7 bundles of 10 carrots and 1 pea

$$\underline{71} + \underline{20} = \underline{91}$$

E.  5 bundles of 10 carrots and 6 peas

$$\underline{50} + \underline{6} = \underline{56}$$

F.  1 bundle of 10 carrots and 9 peas

$$\underline{19} + \underline{40} = \underline{59}$$