


Name: _____

Bundles: Tens and Ones

A way to think about numbers is to think of bundles.
For example, take the number 23.


It's 2 bundles of ten  and 3  ones.

Write the numbers for each set of flowers below.

A.  _____

B.  _____

C.  _____

D.  _____


E.  _____

Bundles: Tens and Ones

A way to think about numbers is to think of bundles. For example, take the number 23.


It's 2 bundles of ten  and 3  ones.


Write the numbers for each set of flowers below.

A.  35

B.  52

C.  16

D.  48

E.  71