



# On the Midway: Bottle Throw Multiplication

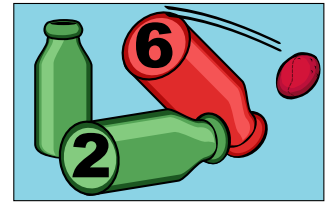
Name: \_\_\_\_\_

At the amusement park, the Bottle Throw is a popular game. People throw bean bags to knock over bottles to win a prize.

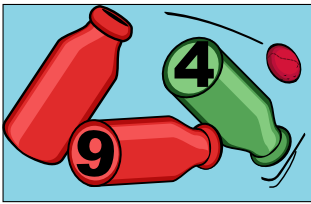
At this Bottle Throw you will find a number on the bottom of the bottle. Write a multiplication number sentence for each set of bottles.

**Important!** Green bottles are tens. Red bottles are ones.

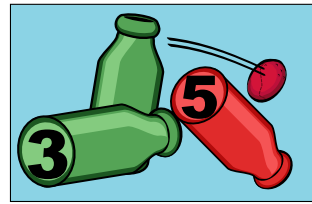
## EXAMPLE



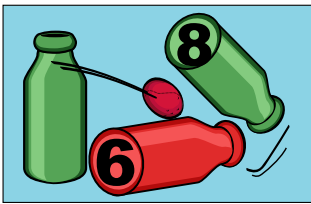
$$\begin{array}{r} 6 \\ \times 20 \\ \hline 120 \end{array}$$



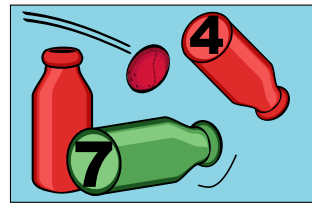
\_\_\_ x \_\_\_ = \_\_\_




\_\_\_ x \_\_\_ = \_\_\_




\_\_\_ x \_\_\_ = \_\_\_



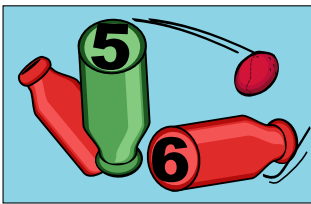
\_\_\_ x \_\_\_ = \_\_\_



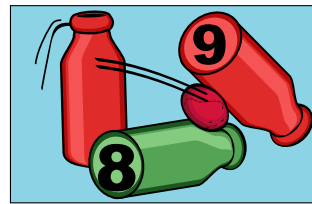
\_\_\_ x \_\_\_ = \_\_\_



\_\_\_ x \_\_\_ = \_\_\_



\_\_\_ x \_\_\_ = \_\_\_



\_\_\_ x \_\_\_ = \_\_\_



# On the Midway: Bottle Throw Multiplication

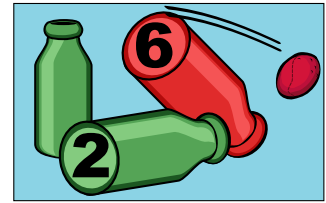
Name: \_\_\_\_\_

At the amusement park, the Bottle Throw is a popular game. People throw bean bags to knock over bottles to win a prize.

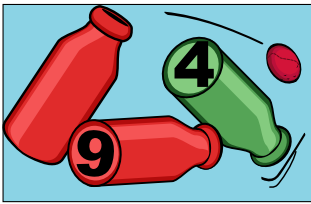
At this Bottle Throw you will find a number on the bottom of the bottle. Write a multiplication number sentence for each set of bottles.

**Important!** Green bottles are tens. Red bottles are ones.

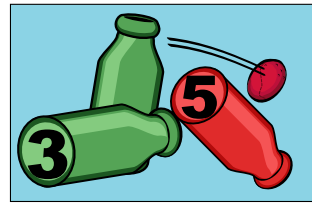
## EXAMPLE



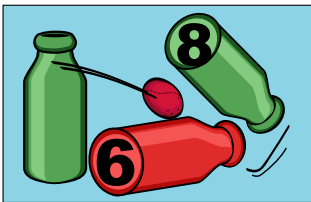
$$\begin{array}{r} 6 \\ \times 20 \\ \hline \end{array} = \underline{\quad 120 \quad}$$



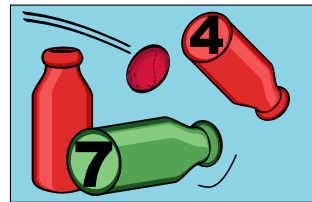
$$\begin{array}{r} 40 \\ \times 9 \\ \hline \end{array} = \underline{\quad 360 \quad}$$



$$\begin{array}{r} 30 \\ \times 5 \\ \hline \end{array} = \underline{\quad 150 \quad}$$




$$\begin{array}{r} 8 \\ \times 60 \\ \hline \end{array} = \underline{\quad 480 \quad}$$



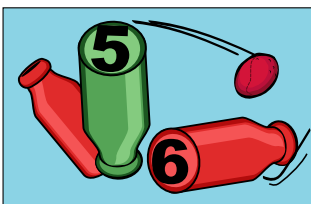
$$\begin{array}{r} 70 \\ \times 4 \\ \hline \end{array} = \underline{\quad 280 \quad}$$



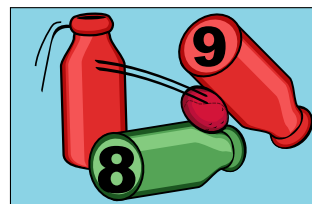
$$\begin{array}{r} 2 \\ \times 90 \\ \hline \end{array} = \underline{\quad 180 \quad}$$



$$\begin{array}{r} 7 \\ \times 80 \\ \hline \end{array} = \underline{\quad 560 \quad}$$



$$\begin{array}{r} 50 \\ \times 6 \\ \hline \end{array} = \underline{\quad 300 \quad}$$



$$\begin{array}{r} 80 \\ \times 9 \\ \hline \end{array} = \underline{\quad 720 \quad}$$