




Name: \_\_\_\_\_

## Roller Coaster Rounding: Nearest 100


You can round numbers to the nearest 100 by looking at the tens place value. Pretend each number is a roller coaster car.

If the number on the roller coaster car has a tens place value between 0 and 4, then the car goes back down to the start.

If the number on the roller coaster car has a tens place value between 5 and 9, then the car goes forward to the end.



Now you try it! For each car below, round the number on the car to the nearest 100. Write the answer in the blank.



\_\_\_\_\_




\_\_\_\_\_



\_\_\_\_\_



\_\_\_\_\_



\_\_\_\_\_



\_\_\_\_\_




Name: \_\_\_\_\_

## Roller Coaster Rounding: Nearest 100

You can round numbers to the nearest 100 by looking at the tens place value. Pretend each number is a roller coaster car.

If the number on the roller coaster car has a tens place value between 0 and 4, then the car goes back down to the start.

If the number on the roller coaster car has a tens place value between 5 and 9, then the car goes forward to the end.



Now you try it! For each car below, round the number on the car to the nearest 100. Write the answer in the blank.



600



300



700



500



500



900