


# Telling Time With Clocky the Caterpillar

Name: \_\_\_\_\_


Here's Clocky the Caterpillar with lots of clocks for you to read! Look at each of Clocky's clocks. Write the time for each clock in the space below.



**X**

**EXAMPLE**

x **4:10**





A _____	D _____	G _____
B _____	E _____	H _____
C _____	F _____	I _____
		J _____

# Telling Time With Clocky the Caterpillar

Name: \_\_\_\_\_

Here's Clocky the Caterpillar with lots of clocks for you to read! Look at each of Clocky's clocks. Write the time for each clock in the space below.

**X**  **EXAMPLE**  
 X 4:10



- |   |              |   |             |   |              |
|---|--------------|---|-------------|---|--------------|
| A | <u>12:40</u> | D | <u>1:10</u> | G | <u>9:15</u>  |
| B | <u>7:20</u>  | E | <u>6:30</u> | H | <u>8:55</u>  |
| C | <u>5:05</u>  | F | <u>3:55</u> | I | <u>2:25</u>  |
|   |              |   |             | J | <u>11:50</u> |