
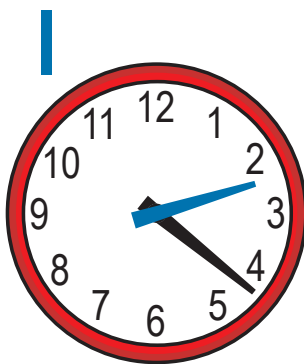
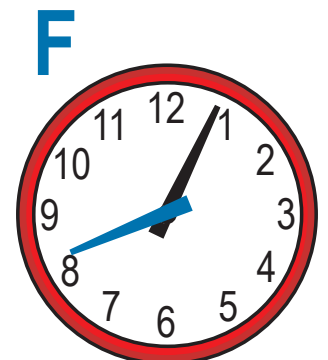
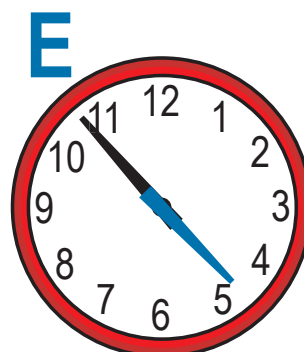
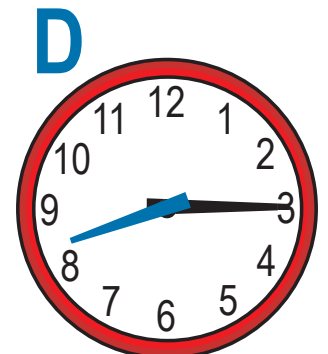
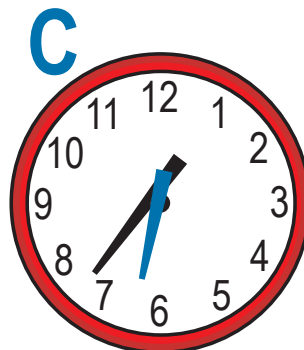
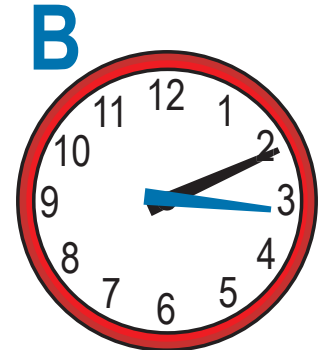
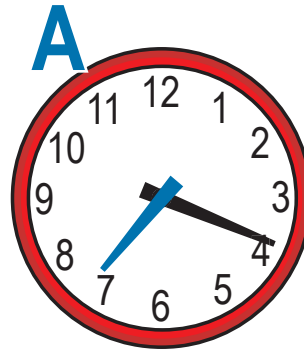


Name: _____

Clock Matching

On the left side of the page is a list of times. Each time matches a clock on the right. Write the correct letter of each clock that matches the time.

8:15	_____
2:22	_____
4:53	_____
7:19	_____
1:42	_____
12:36	_____
3:12	_____
8:04	_____
6:27	_____
11:47	_____



Name: _____

Clock Matching

On the left side of the page is a list of times. Each time matches a clock on the right. Write the correct letter of each clock that matches the time.

8:15	D
2:22	I
4:53	E
7:19	A
1:42	G
12:36	J
3:12	B
8:04	F
6:27	C
11:47	H

