

Name: _____

Drawing Triangles Using Three Angle Measurements

Use a protractor to draw the following triangles.

A) All angles are 60° .

B) Two angles are 45° , and one angle is 90° .

C) One angle is 120° ; one angle is 40° ; and one angle is 20° .

D) Two angles are 50° , and one angle is 80° .

E) One angle is 100° ; one angle is 30° ; and one angle is 50° .

F) One angle is 70° ; one angle is 80° ; and one angle is 30° .


Name: _____

Key


Drawing Triangles Using Three Angle Measurements

Use a protractor to draw the following triangles.


A) All angles are 60° .



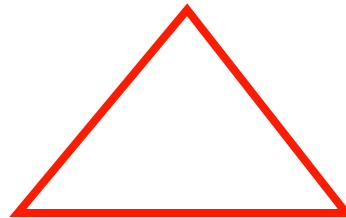
B) Two angles are 45° , and one angle is 90° .




C) One angle is 120° ; one angle is 40° ; and one angle is 20° .



D) Two angles are 50° , and one angle is 80° .



E) One angle is 100° ; one angle is 30° ; and one angle is 50° .



F) One angle is 70° ; one angle is 80° ; and one angle is 30° .

